



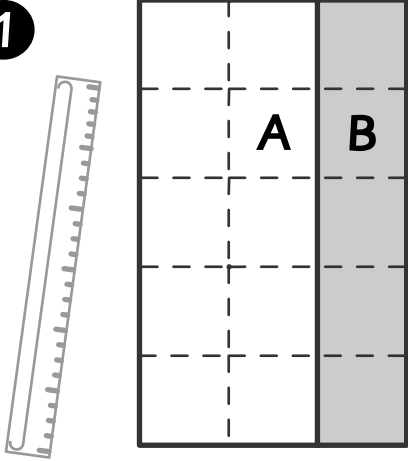
Paving the Way

Activity Sheet

Name: _____ Class: _____

Show two ways to find the area of each rectangle.

1



Area of A: _____ Area of B: _____

Total Area = Area A + Area B: _____

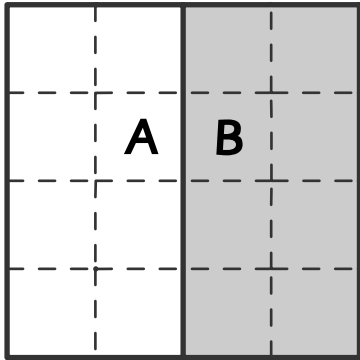
Width: _____

Length of A: _____ Length of B: _____

Total Length: _____

Total Area = Length x Width: _____

2



Area of A: _____ Area of B: _____

Total Area = Area A + Area B: _____

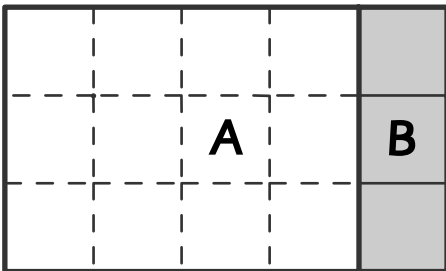
Width: _____

Length of A: _____ Length of B: _____

Total Length: _____

Total Area = Length x Width: _____

3



Area of A: _____ Area of B: _____

Total Area = Area A + Area B: _____

Width: _____

Length of A: _____ Length of B: _____

Total Length: _____

Total Area = Length x Width: _____

